
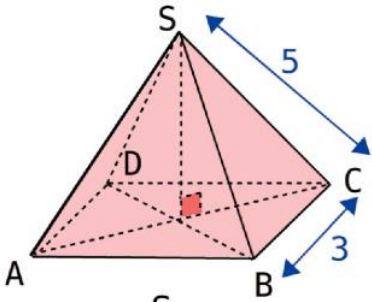
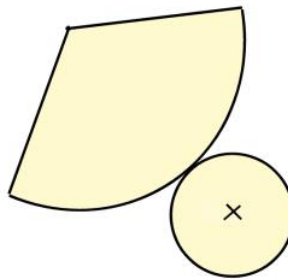
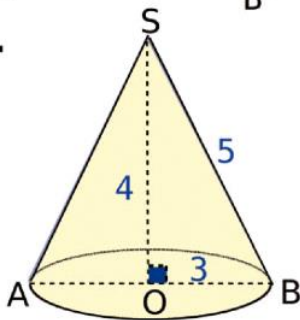


Fiche exercice pyramide et cone 3eme

a. ABCD est un carré.



b.



- 1) Compléter les 2 patrons en indiquant les dimensions connues ainsi que les cotés égaux.
- 2) Calculer le volume de ces 2 solides.